

Name _____

Pre-Mid Term Test (May 2024)

M.M: 40

Roll No _____

Class I

Date: 20.5.24

Time allotted : 2 hours

Subject: Maths

Q1. Tick the correct option:

(5)

a) Numeral of thirty five is _____.

34

35

36

37

b) Shape with all equal sides.

Square

circle

triangle

rectangle

c) Find the smallest number.

56

75

30

44

d) Number that comes just after 69.

60

70

80

90

e) Complete the pattern A2 B4 C6 _____

D2

E8

D4

D8

Q2. Write backward counting:


(2)

30									21
50									41

Q3. Tick the correct shape:

(3)

a) Its opposite sides are equal.



b) It has no corners.



c) It has three sides.



Q4. Fill in the blanks:

(4)

- a) A _____ has all equal sides.
- b) 135, 136, 137, _____, 139, 140.
- c) Shape of a door is _____.
- d) Number that comes just before 35 is _____.

rectangle
34
square
138

Q5. Write True or False:

(4)

- a) Numeral of **seventeen** is 70. _____
- b) Rectangle has only one side. _____
- c) A↓ B↑ A↓ B↑ _____
- d) 39 comes between 38 and 40. _____

Q6. Complete the series:

(3)

- a) 123, 124, 125, _____, _____.
- b) 167, 168, 169, _____, _____.
- c) 110, 111, 112, _____, _____.


Q7. Put sign >, < or =

(4)

- a) 56 76
- b) 32 32
- c) 78 87
- d) 91 71

Q8. Complete the pattern:

(3)

- a) (2)  (6) _____
- b) 55, 66, 77, 88, _____
- c) ↑ ↓ ↓ ↑ ↑ ↑ _____

Q9. Dodging tables:

(4)

- a) $2 \times 7 =$ _____ c) $5 \times 9 =$ _____
b) $5 \times 4 =$ _____ d) $2 \times 3 =$ _____

Q10. Write number names:

(3)

- a) 46 - _____.
- b) 22 - _____.
- c) 50 - _____.

Q11. Who am I ?

(5)

- a) I am greater than 87. _____
- b) I am number name of 12. _____
- c) I come just after 54. _____
- d) I come between 67 and 69. _____
- e) I come just before 23. _____

Q4. Fill in the blanks:

(4)

- a) A square has all equal sides.
- b) 135, 136, 137, 138, 139, 140.
- c) Shape of a door is rectangle.
- d) Number that comes just before 35 is 34.

rectangle
34
square
138

Q5. Write True or False:

(4)

- a) Numeral of **seventeen** is 70. F
- b) Rectangle has only one side. F
- c) A↓ B↑ A↓ B↑ T
- d) 39 comes between 38 and 40. T

Q6. Complete the series:

(3)

- a) 123, 124, 125, 126, 127.
- b) 167, 168, 169, 170, 171.
- c) 110, 111, 112, 113, 114.




















Q7. Put sign >, < or =

(4)

- a) 56 76
- b) 78 87
- c) 32 32
- d) 91 71

Q8. Complete the pattern:

(3)

- a)     
- b) 55, 66, 77, 88, 99, 110.
- c)              

Q9. Dodging tables:

(4)

a) $2 \times 7 = \underline{14}$ b) $5 \times 9 = \underline{45}$

c) $5 \times 4 = \underline{20}$ d) $2 \times 3 = \underline{6}$

Q10. Write number names:

(3)

a) 46 – Forty six.

b) 22 – Twenty two.

c) 50 - Fifty.

Q11. Who am I ?

(5)

a) I am greater than 87. 88 or any other number greater than 87.

b) I am number name of 12. Twelve

c) I come just after 54. 55

d) I come between 67 and 69. 68

e) I come just before 23. 22