



Name \_\_\_\_\_

Mid Term , August 2024

Time Allotted: 2.5 hours

Roll No \_\_\_\_\_

Class I


M. Marks: 50

Date: 04.9.24

Subject: Maths

**Q1. Circle the correct answer:**

(5)

a) 4 tens 3 ones	-	43	53	50
b) The sum of 62 and 0	-	00	62	26
c) The number just before 130	-	139	131	129
d) Place value of 5 in 95	-	05	50	90
e) 	-	Odd	Even	Ordinal

**Q2. Write True or False:**

(4)

- a) Place of 7 is tens, in number 70. \_\_\_\_\_
- b) Sixth can be written as 6<sup>th</sup> also. \_\_\_\_\_
- c) 25 is an even number. \_\_\_\_\_
- d) 54 is less than 40. \_\_\_\_\_

**Q3. Do these:**

(6)

- a)  $17 + 3 = \underline{\quad}$                       d)  $35 + 0 = \underline{\quad}$
- b)  $56 + \underline{\quad} = 12 + 56$                       e)  $82 + \underline{\quad} = 83$
- c)  $62 + \underline{\quad} = 68$                               f)  $40 + 10 = \underline{\quad}$

**Q4. Fill in the blanks:**

(3)

## B R E A K F A S T

- a) **B** is the \_\_\_\_\_ letter.
- b) The letter \_\_\_\_\_ is at **9th** position, from beginning.
- c) If we add one more letter in the front, than **A** will be at \_\_\_\_\_ position.



**Q12. Add and write number name of the answer:**

**(3)**

a) 
$$\begin{array}{r} T \quad O \\ 4 \quad 3 \end{array}$$

b) 
$$\begin{array}{r} T \quad O \\ 4 \quad 8 \end{array}$$

$$\begin{array}{r} + 2 \quad 3 \\ \hline \end{array}$$

$$\begin{array}{r} + 1 \quad 0 \\ \hline \end{array}$$

**Q13. Word problem sums:**

**(4)**

- a) There are **62** mangoes and **23** apples in a basket. How many total fruits are there in the basket?

**Sol:** \_\_\_\_\_

\_\_\_\_\_

\_\_\_\_\_

- b) **15** girls were skipping the rope . **14** more joined them. How many girls are there now ?

**Sol:** \_\_\_\_\_

\_\_\_\_\_

\_\_\_\_\_

**Q14. Write the even numbers between 21 to 29.**

**(2)**

\_\_\_\_\_ .

**Q15. Write the odd numbers between 32 to 40.**

**(2)**

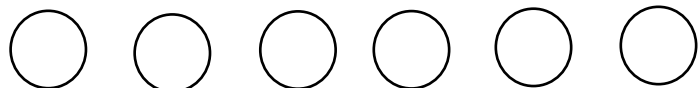
\_\_\_\_\_ .

**Q16. Do as directed:**

**(2)**

- a) Draw a star in first circle.

- b) Draw a triangle in fifth circle.



-----



Name \_\_\_\_\_

Mid Term I, August 2024

Time Allotted: 2.5 hours

Roll No \_\_\_\_\_

Class I (ANSWER KEYS)


M. Marks: 50

Date: 04.9.24

Subject: Maths

Q1. Circle the correct answer:

(5)

a) 4 tens 3 ones	-	43	53	50
b) The sum of 62 and 0	-	00	62	26
c) The number just before 130	-	139	131	129
d) Place value of 5 in 95	-	05	50	90
e) 	-	Odd	Even	Ordinal

Q2. Write True or False:

(4)

- a) Place of 7 is tens, in number 70. **T**
- b) Sixth can be written as 6<sup>th</sup> also. **T**
- c) 25 is an even number. **F**
- d) 54 is less than 40. **F**

Q3. Do these:

(6)

- a)  $17 + 3 = 20$
- b)  $56 + 12 = 12 + 56$
- c)  $62 + 6 = 68$
- d)  $35 + 0 = 35$
- e)  $82 + 1 = 83$
- f)  $40 + 10 = 50$

Q4. Fill in the blanks :

(3)

## B R E A K F A S T

- a) **B** is the 1st letter.
- b) The letter **T** is at **9th** position, from beginning.
- c) If we add one more letter in the front, than **A** will be at 5th position.

**Q5. Read the abacus and write the numeral and its number name:** (2)

a)	<table border="0"> <tr> <td style="text-align: center;">T</td> <td style="text-align: center;">O</td> </tr> <tr> <td style="text-align: center;"> </td> <td></td> </tr> <tr> <td style="text-align: center;">6</td> <td style="text-align: center;">3</td> </tr> </table>	T	O			6	3	Numeral	Number Name
T	O								
6	3								
		<u>63</u>	<u>Sixty three</u>						

**Q6. Dodging tables:** (4)

- |                                  |                                  |
|----------------------------------|----------------------------------|
| a) $3 \times 4 = \underline{12}$ | c) $5 \times 8 = \underline{40}$ |
| b) $5 \times 5 = \underline{25}$ | d) $2 \times 3 = \underline{6}$  |

**Q7. Put sign >, < or =** (4)

- |   |  |
|---|--|
| a) $10 + 4 \quad \boxed{=} \quad 12 + 4$  | c) $26 + 4 \quad \boxed{<} \quad 35 + 0$ |
| b) $84 + 3 \quad \boxed{>} \quad 60 + 10$ | d) $55 + 2 \quad \boxed{>} \quad 21 + 4$ |

**Q8. Write the place and place value of underlined digits:** (2)

- |                     | Place       | Place Value |
|---------------------|-------------|-------------|
| a) $\underline{2}5$ | <u>Tens</u> | <u>20</u>   |
| b) $8\underline{1}$ | <u>Ones</u> | <u>1</u>    |

**Q9. Identify the numbers as Odd or Even:** (2)

- a) 89 - Odd    b) 42 - Even    c) 68 - Even    d) 21 - Odd

**Q10. Match the following:** (4)

- |                 |     |    |
|-----------------|-----|----|
| a) $3 \times 9$ | 90  | b) |
| b) Even number  | 7th | d) |
| c) Fifty seven  | 27  | a) |
| d) Seventh      | 57  | c) |

**Q11. Write serial counting:** (1)

261	262	263	264	265	266	267	268	269	270
-----	-----	-----	-----	-----	-----	-----	-----	-----	-----

**Q12. Add and write number name of the answer:** (3)

T O  
a) 4 3

+ 2 3

6	6
---	---

Sixty six

T O  
b) 4 8

+ 1 0

5	8
---	---

Fifty eight

**Q13. Word problem sums:** (4)

a) There are **62** mangoes and **23** apples in a basket. How many total fruits are there in the basket?

**Sol:** Mangoes = 62

Apples = + 23

Total fruits = 85

b) **15** girls were skipping the rope . **14** more joined them. How many girls are there now ?

**Sol:** Girls skipping rope = 15

More joined = + 14

Total girls = 29

**Q14: Write the even numbers between 21 to 29.** (2)

22 24 26 28 .

**Q15: Write the odd numbers between 32 to 40.** (2)

33 35 37 39 .

**Q16. Do as directed:** (2)

a) Draw a star in first circle.

b) Draw a triangle in fifth circle.

