



**Bal Bharati**  
PUBLIC SCHOOL  
LUDHIANA




*Class 11*




# Holiday Homework






To make a project on how change of seasons affect our clothing and food habits..

Seasons affect our habits. In cold winter months, we wear warm clothes and like to eat warm food. We sleep for a longer time in winter. In summer, we like to wear loose cotton clothes. We drink lots of water and like to eat mangoes, watermelon, curd and ice creams.







Create and illustrate a short story that naturally includes numbers, shapes, measurements etc. The story can be related to anything that includes some kind of mathematics. Your story could include counting objects, adding prices, measuring ingredients, describing shapes, comparing sizes, distances etc.

*Be creative! Use colourful drawings and clear descriptions to bring your maths story to life.*

## **Maths Story** **Time** **(Roll no. 1- 15)**

## **Magical Maths** **Garden** **(Roll no. 15 onwards)**

Grab your pencils and colours—it's time to create a magical maths garden!

Draw a creative maths-themed garden that includes different shapes, patterns, numbers ( skip counting, serial counting, odd and even numbers) etc.

Let your imagination grow and watch your garden bloom with maths magic!

Picture for reference given below.

**Note : Do assignments uploaded on Google classroom**

# PAPER BAG PUPPETS



*Paper bag puppets are a fantastic way to encourage story-telling and role playing among children. They provide opportunities for creativity and imaginative play.*

*Visit a bookstore with your parents. Pick up your favourite story book. Read any story and design a paper bag puppet of your favourite story character.*



**Note :**

**Do assignments  
uploaded on  
Google classroom.**





# हिंदी

1. आप पक्षियों या जानवरों के लिए क्या-क्या करते हैं। एक घोंसले का Model बनाएँ या पक्षियों के पानी पीने के लिए या दाना खाने के लिए बरतन का Model बनाएँ।


रोल नंबर 1-19



2. कोई भी एक चित्र अपनी इच्छा अनुसार लगाकर, उसमें से कम से कम किन्ही 10 संज्ञा शब्दों को छांट कर लिखें।

रोल नंबर 20-38





**Class - II (2025-26)**  
**English Practice Worksheet**

**Q1) Fill in the blanks using the words from the box.**

unhealthy	food	stale	everyday	breakfast
-----------	------	-------	----------	-----------

1. We should not eat \_\_\_\_\_ food.
2. We eat \_\_\_\_\_ in the morning.
3. We should drink milk \_\_\_\_\_.
4. We need \_\_\_\_\_ and water to live.
5. Eating a lot of candies is \_\_\_\_\_.

**Q 2) Write down the opposite of the following words:**

1. cold- \_\_\_\_\_
2. dry- \_\_\_\_\_
3. empty- \_\_\_\_\_
4. sweet- \_\_\_\_\_
5. smooth- \_\_\_\_\_
6. big - \_\_\_\_\_
7. many - \_\_\_\_\_
8. juicy- \_\_\_\_\_
9. ripe- \_\_\_\_\_
10. edible - \_\_\_\_\_



Q3) Make sentences of the following words:

1. healthy: \_\_\_\_\_

2. chew: \_\_\_\_\_

3. fruits: \_\_\_\_\_

4. bite: \_\_\_\_\_

5. bake: \_\_\_\_\_

Q4) Put the words in their correct order to make meaningful sentences.

1)like/I/tomato/soup/.

\_\_\_\_\_

2)some/want/i/chocolate/.

\_\_\_\_\_

3)don't/i/hamburgers/like/.

\_\_\_\_\_

4)love/i/sandwiches/.

\_\_\_\_\_

5)like/i/hotdogs

\_\_\_\_\_

6)my/apples/are/favourite/fruit/.


\_\_\_\_\_

7)hate/cheese/i/really/!


\_\_\_\_\_

8)like/i/bread/white/.

\_\_\_\_\_



Q5) Complete the crossword puzzle.








Name: .....  
Class II

Subject – Maths  
Worksheet no. 1

## Add and colour



5=red

7=brown

9=orange

11=grey

6=green

8=blue

10=yellow

12=pink

**Choose the correct answer.**

**Subject – Maths**

**Class II**

**Worksheet no. 2**

Q1. You have 5 pencils and your friend gives you 4 more. How many pencils do you have now?

- A) 8 pencils      B) 9 pencils      C) 10 pencils      D) 11 pencils

Q2. What is the next number in the sequence? 1, 3, 5, 7, \_\_

- A) 8      B) 9      C) 10      D) 11

Q3. You had 12 candies, but ate 5. How many candies are left with you?

- A) 6 candies      B) 7 candies      C) 8 candies      D) 9 candies

Q4. I have 3 sides and 3 corners. What shape am I?

- A) Triangle      B) Rectangle      C) Square      D) Circle

Q5. How many legs do 3 cats have in total?

- A) 6 legs      B) 8 legs      C) 10 legs      D) 12 legs

Q6. I am a number. I am greater than 10, but less than 14. I am an even number. What number am I?

- A) 11      B) 12      C) 13      D) 14

Q7. Which shape has no corners?

- A) Triangle      B) Rectangle      C) Square      D) Circle

**II. Children brought the following food items for the picnic. Look at the food items written below and write down the name of the shape that each food item resembles:**

Example: Pizza Slice → Triangle

Apple → \_\_\_\_\_

b) Slice of a bread → \_\_\_\_\_

c) Watermelon → \_\_\_\_\_

d) Sandwich (cut in half) → \_\_\_\_\_

e) Pancake → \_\_\_\_\_



**III. During the picnic, children decided to play a quiz. Help them in completing the given series:**

1.Skip by 5:

33, 38, \_\_\_\_\_ , \_\_\_\_\_ , 53, \_\_\_\_\_

2.Skip by 2:

54, \_\_\_\_\_, 58, \_\_\_\_\_, 62, \_\_\_\_\_

3.Skip by 4:

81, \_\_\_\_\_, 89, 93, \_\_\_\_\_, \_\_\_\_\_



**IV. Imagine children are setting up a picnic!**

**Write down the place value of the underlined ingredient in each recipe:**

a) Recipe for Lemonade: 35 lemons

The place value of the underlined digit is \_\_\_\_\_.

b) Recipe for Pasta: 475 grams of pasta


The place value of the underlined digit is \_\_\_\_\_.

c) Recipe for Sandwiches: 135 slices of cheese

The place value of the underlined digit is \_\_\_\_\_.







**“Sunshine,  
freedom,  
and  
a splash of fun—  
hello, summer  
vacation!”**



**Bal Bharati**  
PUBLIC SCHOOL  
LUDHIANA

बालभारती

